

Adding and Subtracting Polynomials

Simplify each expression.

1) $(5p^2 - 3) + (2p^2 - 3p^3)$

2) $(a^3 - 2a^2) - (3a^2 - 4a^3)$

3) $(4 + 2n^3) + (5n^3 + 2)$

4) $(4n - 3n^3) - (3n^3 + 4n)$

5) $(3a^2 + 1) - (4 + 2a^2)$

6) $(4r^3 + 3r^4) - (r^4 - 5r^3)$

7) $(5a + 4) - (5a + 3)$

8) $(3x^4 - 3x) - (3x - 3x^4)$

9) $(-4k^4 + 14 + 3k^2) + (-3k^4 - 14k^2 - 8)$

10) $(3 - 6n^5 - 8n^4) - (-6n^4 - 3n - 8n^5)$

11) $(12a^5 - 6a - 10a^3) - (10a - 2a^5 - 14a^4)$

12) $(8n - 3n^4 + 10n^2) - (3n^2 + 11n^4 - 7)$

13) $(-x^4 + 13x^5 + 6x^3) + (6x^3 + 5x^5 + 7x^4)$

14) $(9r^3 + 5r^2 + 11r) + (-2r^3 + 9r - 8r^2)$

15) $(13n^2 + 11n - 2n^4) + (-13n^2 - 3n - 6n^4)$

16) $(-7x^5 + 14 - 2x) + (10x^4 + 7x + 5x^5)$

17) $(7 - 13x^3 - 11x) - (2x^3 + 8 - 4x^5)$

18) $(13a^2 - 6a^5 - 2a) - (-10a^2 - 11a^5 + 9a)$

19) $(3v^5 + 8v^3 - 10v^2) - (-12v^5 + 4v^3 + 14v^2)$

20) $(8b^3 - 6 + 3b^4) - (b^4 - 7b^3 - 3)$

21) $(k^4 - 3 - 3k^3) + (-5k^4 + 6k^3 - 8k^5)$

22) $(-10k^2 + 7k + 6k^4) + (-14 - 4k^4 - 14k)$

23) $(-7n^2 + 8n - 4) - (-11n + 2 - 14n^2)$

24) $(14p^4 + 11p^2 - 9p^5) - (-14 + 5p^5 - 11p^2)$

25) $(8k + k^2 - 6) - (-10k + 7 - 2k^2)$

26) $(-9v^2 - 8u) + (-2uv - 2u^2 + v^2) + (-v^2 + 4uv)$

27) $(4x^2 + 7x^3y^2) - (-6x^2 - 7x^3y^2 - 4x) - (10x + 9x^2)$

28) $(-5u^3v^4 + 9u) + (-5u^3v^4 - 8u + 8u^2v^2) + (-8u^4v^2 + 8u^3v^4)$

29) $(-9xy^3 - 9x^4y^3) + (3xy^3 + 7y^4 - 8x^4y^4) + (3x^4y^3 + 2xy^3)$

30) $(y^3 - 7x^4y^4) + (-10x^4y^3 + 6y^3 + 4x^4y^4) - (x^4y^3 + 6x^4y^4)$

Using the Distributive Property

Simplify each expression.

1) $-6(a + 8)$

2) $4(1 + 9x)$

3) $6(-5n + 7)$

4) $(9m + 10) \cdot 2$

5) $(-4 - 3n) \cdot -8$

6) $8(-b - 4)$

7) $(1 - 7n) \cdot 5$

8) $-6(x + 4)$

9) $5(3m - 6)$

10) $(-6p + 7) \cdot -4$

11) $5(b - 1)$

12) $(x + 9) \cdot 5$

$$13) -4(-8x - 8)$$

$$14) -6(7 + x)$$

$$15) -3(x - 5)$$

$$16) -5(10x + 1)$$

$$17) (1 + 2v) \cdot 5$$

$$18) -8(1 - 5x)$$

$$19) -7(5k - 4)$$

$$20) -5(7a - 6)$$

$$21) 5(n + 6)$$

$$22) 4(3r - 8)$$

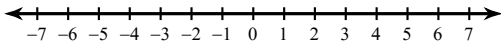
$$23) 3(5 + 5x)$$

$$24) (1 + 9x) \cdot -10$$

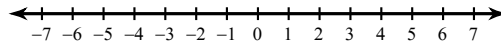
Graphing Inequalities

Draw a graph for each inequality.

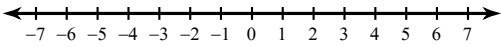
1) $n \leq -5$



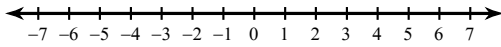
2) $n \leq 5$



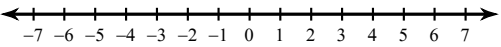
3) $x < 1$



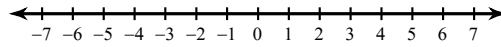
4) $r > 2$



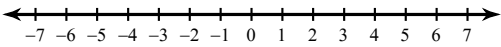
5) $n > 5$



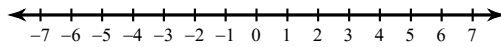
6) $r \leq -2$



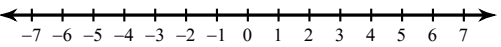
7) $k \leq -2$



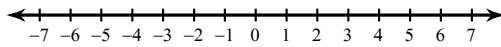
8) $m < -5$



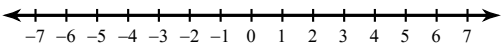
9) $x \geq 2$



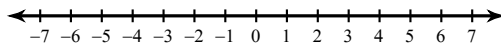
10) $-5 \geq v$



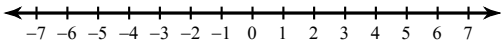
11) $-2 \geq v$



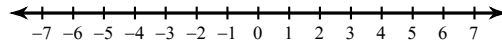
12) $x < 5$



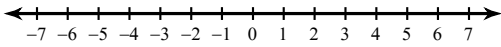
13) $-x \geq 2$



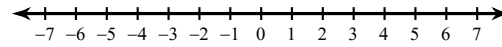
14) $5 \geq -a$



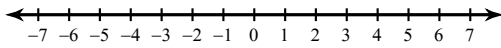
15) $x \leq 2$



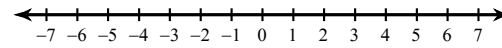
16) $x \leq 5$



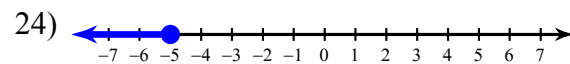
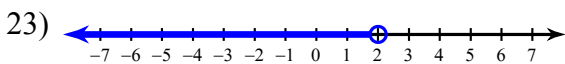
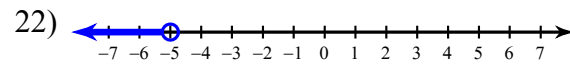
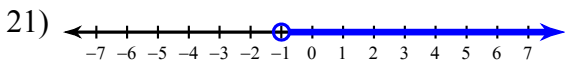
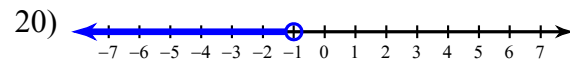
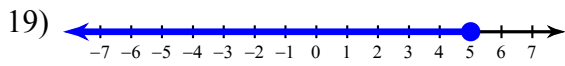
17) $-5 > b$



18) $-2 > b$



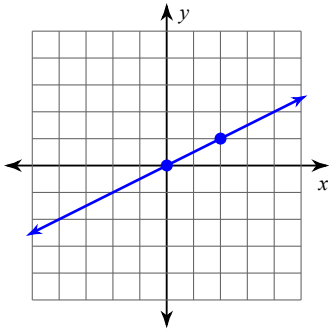
Write an inequality for each graph.



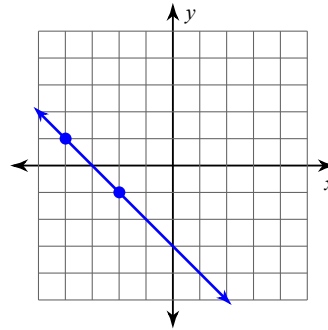
Finding Slope From a Graph

Find the slope of each line.

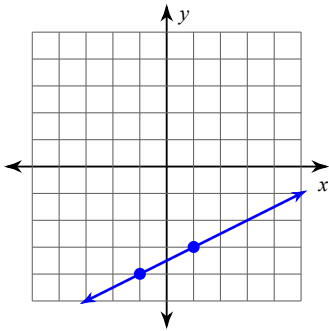
1)



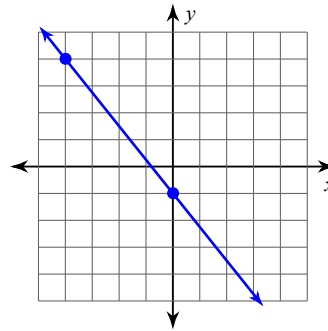
2)



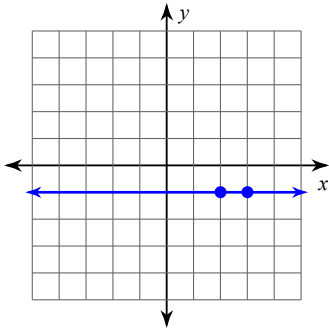
3)



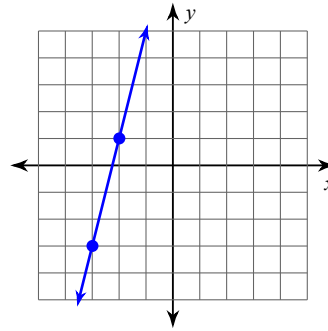
4)



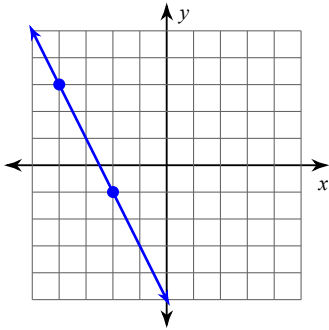
5)



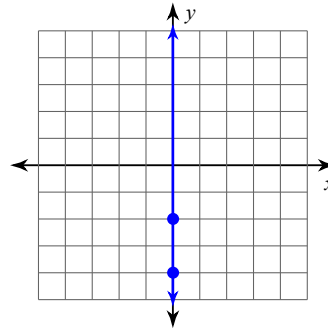
6)



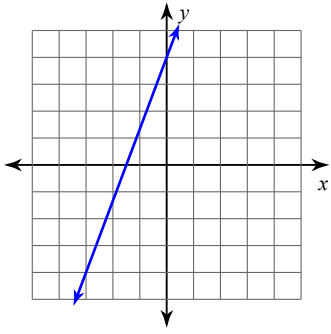
7)



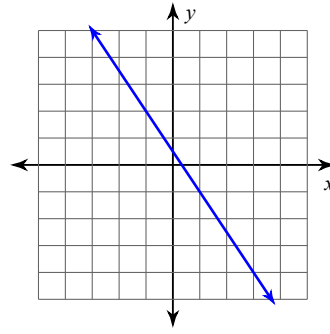
8)



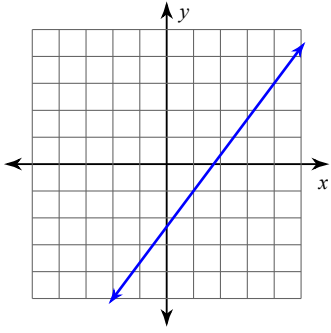
9)



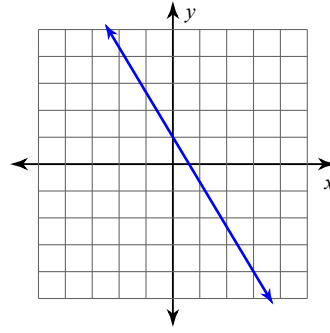
10)



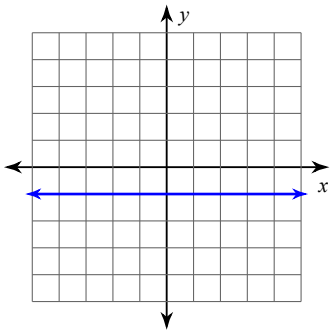
11)



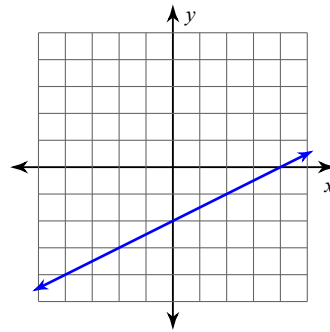
12)



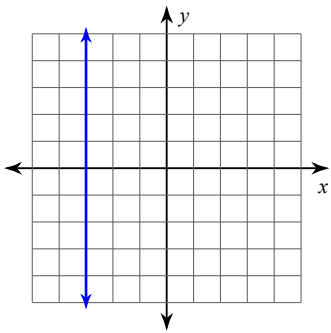
13)



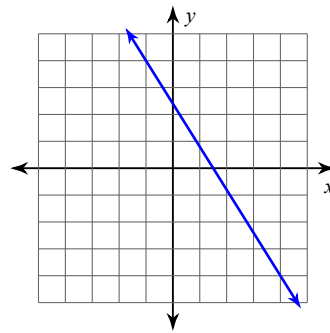
14)



15)



16)



Solving Quadratic Equations by Factoring

Solve each equation by factoring.

1) $(k + 1)(k - 5) = 0$

2) $(a + 1)(a + 2) = 0$

3) $(4k + 5)(k + 1) = 0$

4) $(2m + 3)(4m + 3) = 0$

5) $x^2 - 11x + 19 = -5$

6) $n^2 + 7n + 15 = 5$

7) $n^2 - 10n + 22 = -2$

8) $n^2 + 3n - 12 = 6$

9) $6n^2 - 18n - 18 = 6$

10) $7r^2 - 14r = -7$

$$11) n^2 + 8n = -15$$

$$12) 5r^2 - 44r + 120 = -30 + 11r$$

$$13) -4k^2 - 8k - 3 = -3 - 5k^2$$

$$14) b^2 + 5b - 35 = 3b$$

$$15) 3r^2 - 16r - 7 = 5$$

$$16) 6b^2 - 13b + 3 = -3$$

$$17) 7k^2 - 6k + 3 = 3$$

$$18) 35k^2 - 22k + 7 = 4$$

$$19) 7x^2 + 2x = 0$$

$$20) 10b^2 = 27b - 18$$

$$21) 8x^2 + 21 = -59x$$

$$22) 15a^2 - 3a = 3 - 7a$$

Two-Step Equations

Solve each equation.

1) $6 = \frac{a}{4} + 2$

2) $-6 + \frac{x}{4} = -5$

3) $9x - 7 = -7$

4) $0 = 4 + \frac{n}{5}$

5) $-4 = \frac{r}{20} - 5$

6) $-1 = \frac{5 + x}{6}$

7) $\frac{v + 9}{3} = 8$

8) $2(n + 5) = -2$

9) $-9x + 1 = -80$

10) $-6 = \frac{n}{2} - 10$

11) $-2 = 2 + \frac{v}{4}$

12) $144 = -12(x + 5)$

$$13) -15 = -4m + 5$$

$$14) 10 - 6v = -104$$

$$15) 8n + 7 = 31$$

$$16) -9x - 13 = -103$$

$$17) \frac{n + 5}{-16} = -1$$

$$18) -10 = -10 + 7m$$

$$19) -10 = 10(k - 9)$$

$$20) \frac{m}{9} - 1 = -2$$

$$21) 9 + 9n = 9$$

$$22) 7(9 + k) = 84$$

$$23) 8 + \frac{b}{-4} = 5$$

$$24) -243 = -9(10 + x)$$